



Coimisiún na Scrúduithe Stáit
State Examinations Commission

Junior Cycle Final Examination 2022

Mathematics

Ordinary Level

Friday 10 June Afternoon 1:30 - 3:30

270 marks

Examination Number

<input type="text"/>	<input type="text"/>	<input type="text"/>	<input type="text"/>	<input type="text"/>
----------------------	----------------------	----------------------	----------------------	----------------------

Day and Month of Birth

<input type="text"/>	<input type="text"/>	<input type="text"/>	<input type="text"/>
----------------------	----------------------	----------------------	----------------------

For example, 3rd February
is entered as 0302

<i>For Superintendent</i>	
Centre Stamp	

<i>For Examiner</i>	
Running total	
Grade	

<i>For Examiner</i>					
Q.	Ex.	Adv. Ex.	Q.	Ex.	Adv. Ex.
1			11		
2			12		
3			13		
4					
5					
6					
7					
8					
9					
10			Total		

Instructions

There are 13 questions on this examination paper. Answer **all** questions.

Questions do not necessarily carry equal marks. To help you manage your time during this examination, a maximum time for each question is suggested. If you remain within these times you should have about 10 minutes left to review your work.

Write your answers in the spaces provided in this booklet. You may lose marks if you do not do so. You may ask the superintendent for more paper. Label any extra work clearly with the question number and part.

The superintendent will give you a copy of the *Formulae and Tables* booklet. You must return it at the end of the examination. You are not allowed to bring your own copy into the examination.

You may lose marks if your solutions do not include supporting work.

You may lose marks if you do not include the appropriate units of measurement, where relevant.

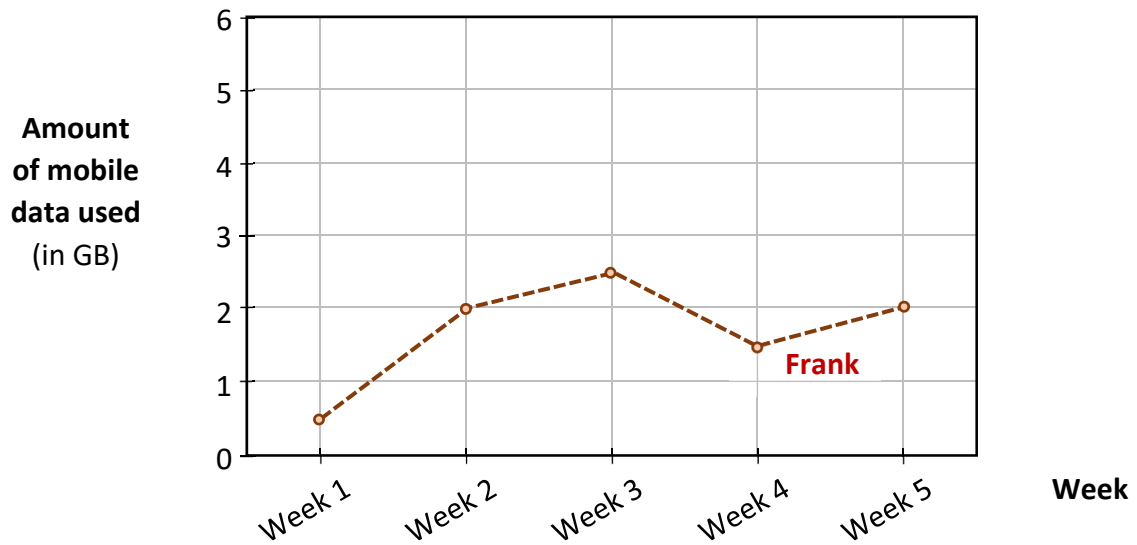
You may lose marks if you do not give your answers in simplest form, where relevant.

Write the make and model of your calculator(s) here:

Question 4

(Suggested maximum time: 5 minutes)

Frank and Ciarán each recorded how much mobile data they used each week for five weeks. The graph below shows the amount of mobile data that Frank used in each of these weeks.



(a) Based on the graph:

(i) in which week did Frank use the **most** mobile data?

Answer:

(ii) how many GB of mobile data did Frank use in **Week 5**?


Answer:

(iii) in which week did Frank use **less** mobile data than the week before?

Answer:

(b) In each of these weeks, Ciarán used **2 GB of data more** than Frank used.

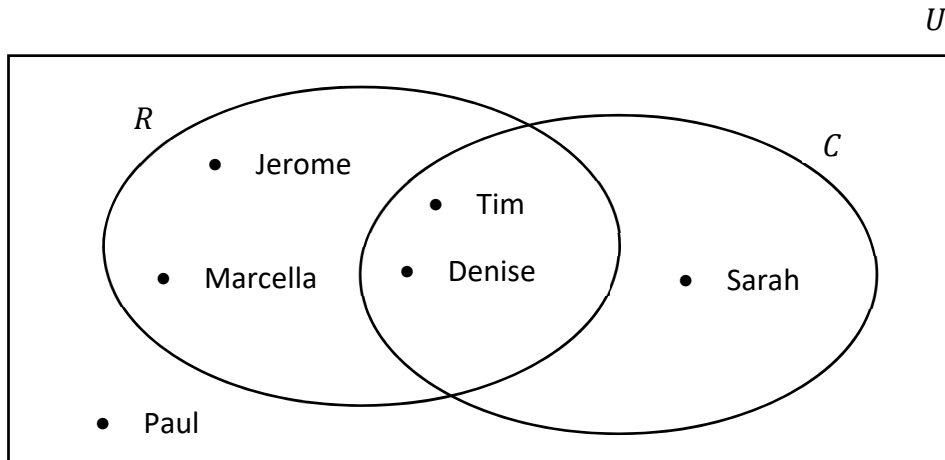
Use this information to draw a graph on the diagram above showing how much mobile data Ciarán used in each of these weeks.



Question 5

(Suggested maximum time: 5 minutes)

6 students in a class (U) were asked if they ran (R) or cycled (C) during the midterm break. The Venn diagram shows their responses.




(a) Name one student who **ran** during the midterm break.

Answer:

(b) Explain what the following statement means, in terms of the students in the class:

$$\# C = 3$$



(c) Name one student who is in the region $R \cap C$ in the Venn diagram.

Answer:

(d) One student is picked at random from the six students in the Venn diagram. Write down the probability that this student **ran** during the midterm break.

Answer:

Question 6

(Suggested maximum time: 15 minutes)

All the students in fourth year in a school took part in a long-jump competition. The results are shown in the following frequency table.

Distance jumped (cm)	200 – 250	250 – 300	300 – 350	350 – 400	400 – 450	450 – 500
Number of students	10	15	25	32	10	3

(a) In **total**, how many students took part in the competition?

Answer:

(b) What is the **modal** group of the frequency table? Tick (✓) **one** box only.

300 – 350

350 – 400

400 – 450

450 – 500

(c) To qualify for the final, a student must jump **415 cm or more**.

(i) What is the **least** number of students who could have qualified for the final?

Answer:

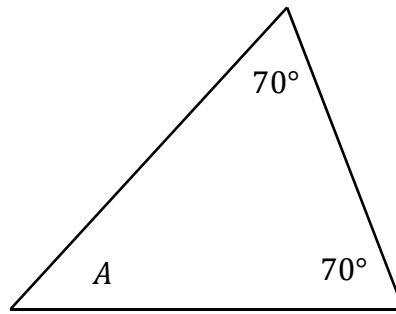
(ii) What is the **greatest** number of students who could have qualified for the final?

Answer:

Question 7

(Suggested maximum time: 10 minutes)

(a) The triangle below has two angles of size 70° , as shown (diagram not to scale).



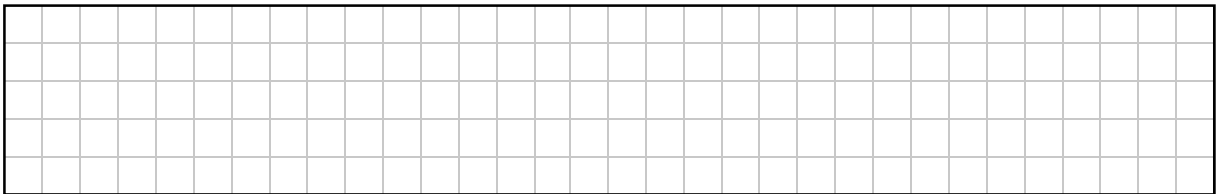
(i) What type of triangle is this? Tick (\checkmark) **one** box only.

Right-angled

Isosceles


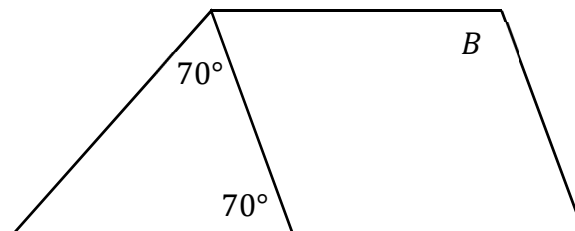
Equilateral

(ii) Work out the size of the angle A , the third angle in this triangle.

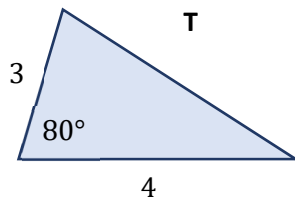


(iii) This triangle is joined to a parallelogram, as shown below.
The angle B in the parallelogram is marked.

Work out the size of the angle B .



- (b) The diagram below shows the triangle T.
The lengths of two sides and the size of one angle are shown.



4 more triangles are shown below.

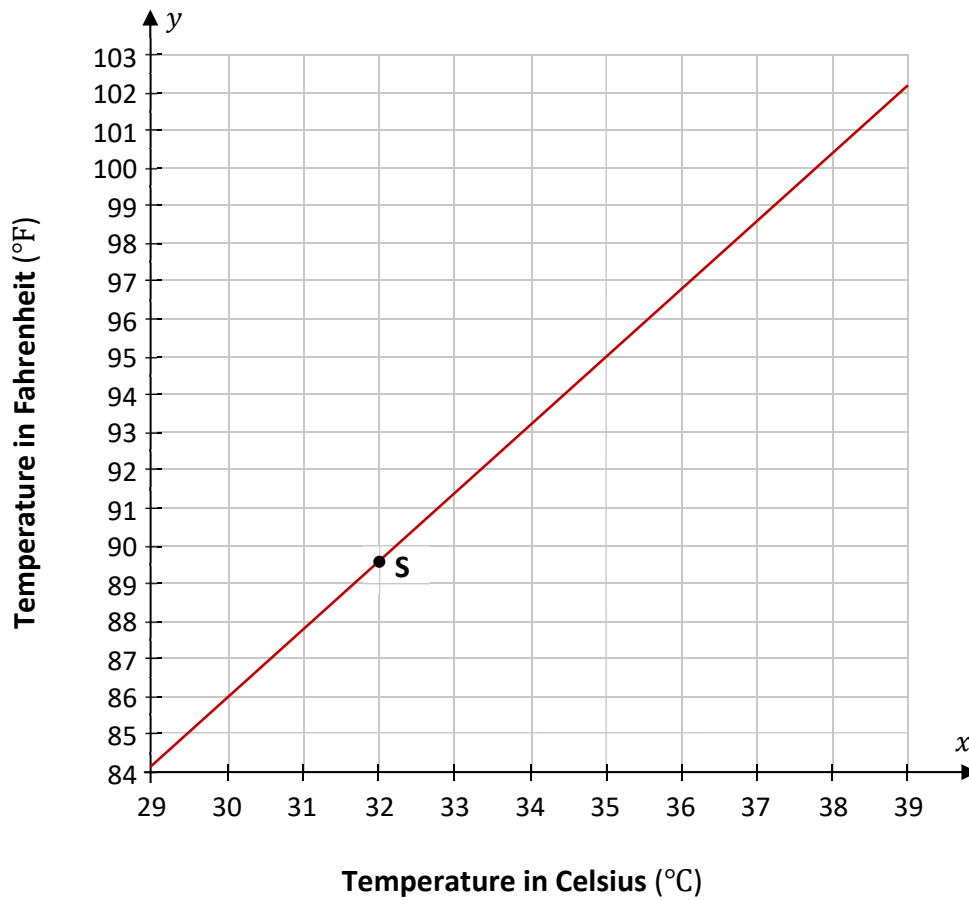
For each triangle, tick (\checkmark) the correct box to show if it is **definitely congruent** to T or not.

Triangle	Is this triangle definitely congruent to T?	
<p>A light blue triangle with a horizontal bottom side of length 4, a vertical right side of length 3, and an angle of 80° at the bottom-right vertex.</p>	Yes <input type="checkbox"/>	No <input type="checkbox"/>
<p>A light blue triangle with a horizontal bottom side of length 4, a vertical left side of length 3, and an angle of 20° at the bottom-right vertex.</p>	Yes <input type="checkbox"/>	No <input type="checkbox"/>
<p>A light blue triangle with a horizontal bottom side of length 3, a vertical left side of length 4, and an angle of 80° at the bottom-right vertex.</p>	Yes <input type="checkbox"/>	No <input type="checkbox"/>
<p>A light blue triangle with a horizontal bottom side of length 3, a vertical right side of length 4, and an angle of 80° at the bottom-right vertex.</p>	Yes <input type="checkbox"/>	No <input type="checkbox"/>

Question 8

(Suggested maximum time: 15 minutes)

The graph on the co-ordinate diagram below shows the relationship between degrees Celsius ($^{\circ}\text{C}$) and degrees Fahrenheit ($^{\circ}\text{F}$). The axes do **not** start at $(0, 0)$ in the diagram.



(a) For parts **(a)(i)** and **(a)(ii)**, show your work on the diagram above.

(i) Normal temperature for an adult is 37°C .
Write 37°C in degrees Fahrenheit.

Answer:

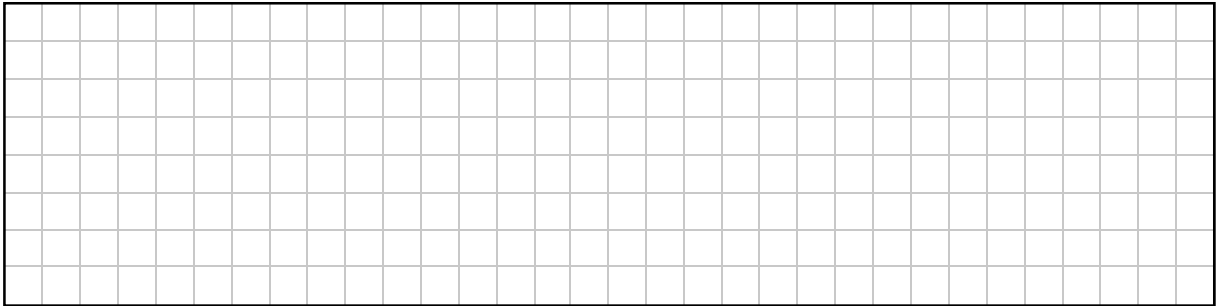
(ii) A temperature above 100.4°F is a high temperature. Write 100.4°F in degrees Celsius.

Answer:

(b) The point **S** is marked on the graph. Estimate the co-ordinates of the point **S**.

S:

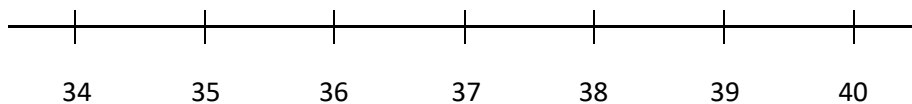
- (c) The points (35, 95) and (30, 86) are also on the graph of the line.
Use these two points to work out the **slope** of the graph.



- (d) The table below gives two inequalities in T (a temperature in $^{\circ}\text{C}$), and a description of two inequalities in T . Complete the table by filling in the missing description and inequality.

	Description	Inequality
1	Temperature is less than 36°C	$T < 36$
2		$36 < T < 38$
3	Temperature is greater than 38°C	

- (e) **Graph** the inequality $T < 36$ on the number line below, where $T \in \mathbb{R}$ (T is a real number).



Question 10

(Suggested maximum time: 5 minutes)

(a) Write the following as a single fraction in its simplest form:

$$\frac{2}{3} + \frac{5}{7}$$

(b) Solve the following equation in k :

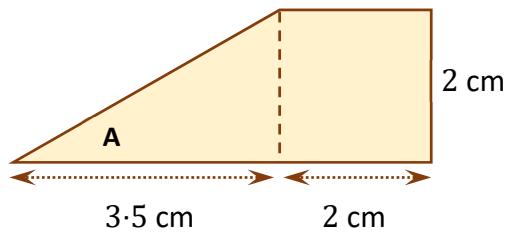
$$4k - 7 = 41$$

Question 11


(Suggested maximum time: 10 minutes)

Two friends are building a skate-board ramp.
They each have a different design for the ramp.

- (a) Tracey draws the following diagram as part of her design for the ramp.
It is made up of a triangle and a square.
It is to a scale of 1: 100.
The angle **A** is marked.



- (i) Construct a scale diagram of this part of the design for the ramp in the grid below, to a scale of 1: 50. Each side in your diagram should be twice the length of the corresponding side in Tracey’s diagram. One side is already done for you.



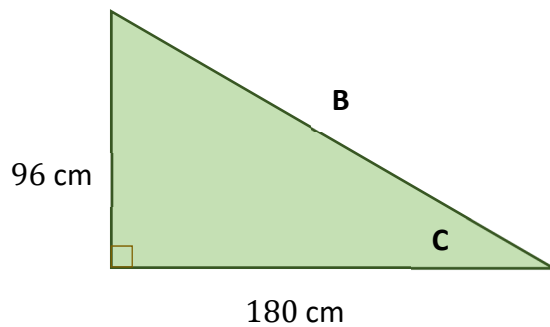
- (ii) Measure the size of the angle **A** in Tracey’s diagram above.

Answer:


Sinéad has a different design for the ramp.

Part of Sinéad's design is the right-angled triangle in the diagram below (not to scale).

One of the sides is marked **B**. One of the angles is marked **C**.




- (b) Use the **Theorem of Pythagoras** to work out the length of the side **B** in Sinéad's design. Give your answer in cm.



- (c) Sinéad knows that, for the angle **C**,

$$\tan C = \frac{96}{180}$$

Use your calculator to find the size of the angle **C**, correct to the nearest degree.



Question 13

(Suggested maximum time: 5 minutes)

- (a)** Simplify $2a - 5n + 2n + 6a$.

(b) $y = \frac{3n + 70}{5}$.


Work out the value of y when $n = 10$.

- (c)** Factorise the quadratic expression $x^2 - 7x + 12$.

$x^2 - 7x + 12 = (x \quad) (\quad)$

Page for extra work.

Label any extra work clearly with the question number and part.



Acknowledgements

Image on page 4: www.hookedonhenryst.com. Altered.

Image on page 6: www.omearacamping.com. Altered.

Image on page 18: www.popsugar.co.uk. Altered.

Image on page 20: www.2kmfromhome.com. Altered.

Do not write on this page

Copyright notice

This examination paper may contain text or images for which the State Examinations Commission is not the copyright owner, and which may have been adapted, for the purpose of assessment, without the authors' prior consent. This examination paper has been prepared in accordance with Section 53(5) of the *Copyright and Related Rights Act, 2000*. Any subsequent use for a purpose other than the intended purpose is not authorised. The Commission does not accept liability for any infringement of third-party rights arising from unauthorised distribution or use of this examination paper.

Junior Cycle Final Examination – Ordinary Level

Mathematics

Friday 10 June

Afternoon 1:30 - 3:30